

Please write clearly in block capitals.

Centre number

--	--	--	--	--

Candidate number

--	--	--	--

Surname

Forename(s)

Candidate signature

I declare this is my own work.

GCSE PHYSICS

H

Higher Tier Paper 2

Friday 16 June 2023

Morning

Time allowed: 1 hour 45 minutes

Materials

For this paper you must have:

- a ruler
- a scientific calculator
- a protractor
- the Physics Equations Sheet (enclosed).

Instructions

- Use black ink or black ball-point pen. Pencil should only be used for drawing.
- Fill in the boxes at the top of this page.
- Answer **all** questions in the spaces provided.
- Do not write outside the box around each page or on blank pages.
- Do all rough work in this book. Cross through any work you do not want to be marked.
- If you need extra space for your answer(s), use the lined pages at the end of this book. Write the question number against your answer(s).
- In all calculations, show clearly how you work out your answer.

Information

- The maximum mark for this paper is 100.
- The marks for questions are shown in brackets.
- You are expected to use a calculator where appropriate.
- You are reminded of the need for good English and clear presentation in your answers.

For Examiner's Use	
Question	Mark
1	
2	
3	
4	
5	
6	
7	
8	
9	
TOTAL	



Answer **all** questions in the spaces provided.

0 1

Infrared waves are **transverse** waves.

0 1 . 1

Complete the sentence.

[1 mark]

In a transverse wave, the direction of oscillation is perpendicular
to the direction of energy transfer by the wave.

A student investigated how the **colour** of a surface **affects the rate** at which the surface **emits infrared radiation**.

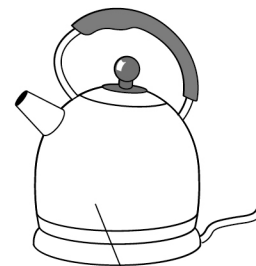
Figure 1 shows some of the equipment used.

Figure 1

Silver-coloured flask



Black-coloured flask



Kettle of cold water



0 1 . 2

The student wrote the following hypothesis:

'The black-coloured flask will emit more infrared radiation than the silver-coloured flask during 10 minutes of cooling.'

Describe a method to test this hypothesis.

[6 marks]

Heat the water in the kettle

Add an equal volume of hot water to each flask

Insert a thermometer into each flask

Record the initial temperature from both flasks

Start a stop clock

Record the temperatures after 10 min from both flasks

Calculate the change in temperatures during the 10 min

Compare the results to test the hypothesis

Question 1 continues on the next page

Turn over ►



0 1 . 3

When will the flasks emit infrared radiation at the greatest rate?

Give a reason for your answer.

[2 marks]

Tick (✓) **one** box.

During the 1st minute

During the 5th minute

During the 9th minute

Reason Because there is the greatest temperature difference between the hot water and the surroundings



Another student investigated the absorption of infrared radiation by different surface colours.

The student filled four hollow metal cubes with cold water.

Each cube was the same size but had a different surface colour.

The cubes were then placed the same distance from an infrared heater.

After 10 minutes, the student measured the temperature increase of the water inside each cube.

0 1 . 4 What was the dependent variable in this investigation?

[1 mark]

The temperature
(increase change after 10 min)

0 1 . 5 Table 1 shows the results.

Table 1

Surface colour of the cube	Temperature increase after 10 minutes in °C
Matt white	3.0
Shiny white	2.0
Matt black	6.5
Shiny black	4.0

Give **two** conclusions that can be made from the results in **Table 1**.

[2 marks]

- 1 Black surfaces absorb more infrared than white surfaces
- 2 Matt surfaces absorb more infrared than shiny surfaces of the same colour.

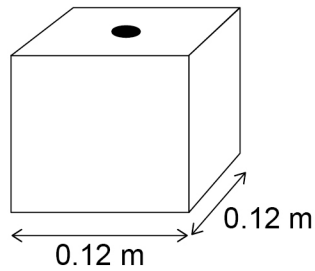
Turn over ►



Figure 2 shows one of the cubes. The cube is filled with water.

The weight of the water exerts a pressure on the bottom of the cube.

Figure 2



Use the Physics Equations Sheet to answer questions **01.6** and **01.7**.

0 1 . 6 Which equation correctly links area, force and pressure?

[1 mark]

Tick (✓) **one** box.

pressure = force \times area²

pressure = force \times area

pressure = $\frac{\text{force}}{\text{area}}$

pressure = $\frac{\text{area}}{\text{force}}$

pressure = $\frac{\text{force normal to a surface}}{\text{area of that surface}}$

$$p = \frac{F}{A}$$



0 1 . 7

The water pressure at the bottom of the cube is 1500 Pa.

Calculate the force of the water on the bottom of the cube.

[4 marks]

$$p = 1500 \text{ Pa}$$

$$F = ?$$

$$A = 0.0144 \text{ m}^2$$

$$p = \frac{F}{A} \quad \frac{F}{A} = p$$

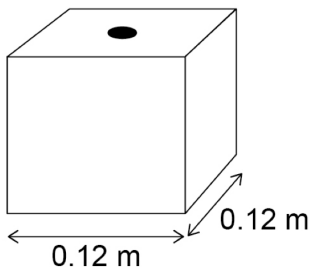
$$F = p \times A$$

$$F = 1500 \times 0.0144$$

$$F = 21.6 \text{ N}$$

Force = 21.6 N

17



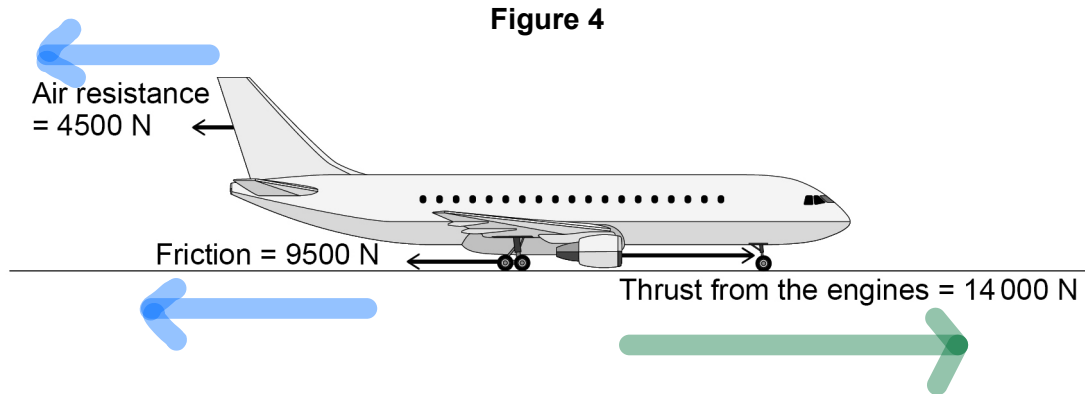
Turn over for the next question

$$\begin{aligned} \text{Area of base} &= 0.12 \text{ m} \times 0.12 \text{ m} \\ &= 0.0144 \text{ m}^2 \end{aligned}$$

Turn over ►



Figure 4 shows the direction of the horizontal forces acting on the aeroplane as it moves in a straight line towards the runway.



0 2 . 2 Determine the **magnitude** of the **resultant horizontal force** on the aeroplane.

[1 mark]

$$\text{Resultant Horizontal Force} = 14000 - 4500 - 9500$$

$$= 0$$

Resultant horizontal force = 0 N

0 2 . 3 Describe the motion of the aeroplane as it moves towards the runway.

[1 mark]

Constant velocity

0 2 . 4 Air resistance and friction are contact forces.

Give **one** other example of a **contact force**.

[1 mark]

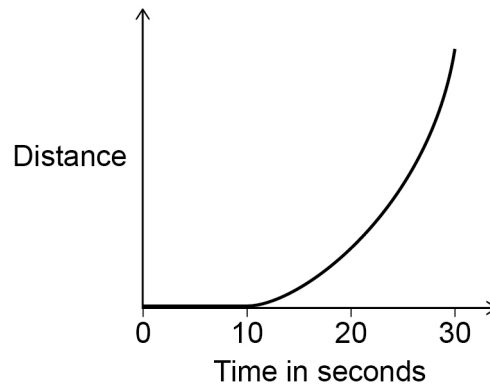
Tension



0 2 . 5 The aeroplane stops for a short time and then accelerates along the runway.

Figure 5 shows a distance–time sketch-graph for this stage of the journey.

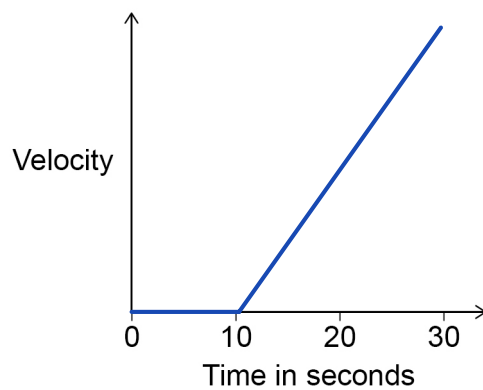
Figure 5



Draw the velocity–time sketch-graph for this stage of the journey on **Figure 6**.

[2 marks]

Figure 6

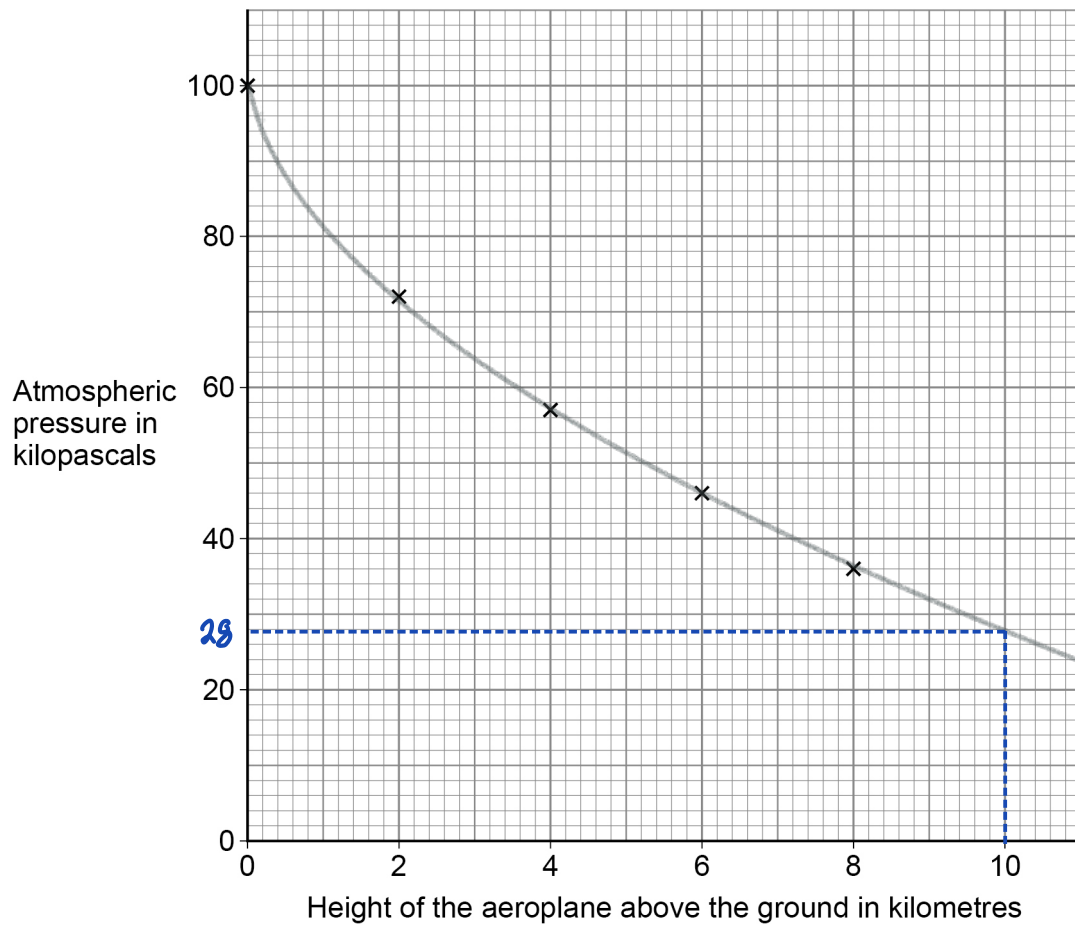


0 2 . 6

The aeroplane takes off from the runway, so its height above the ground increases.

Figure 7 shows how atmospheric pressure varies with the height of the aeroplane above the ground.

Figure 7



Estimate the atmospheric pressure when the height of the aeroplane above the ground is 10 km.

[2 marks]

Atmospheric pressure = 28 kPa

Question 2 continues on the next page

Turn over ►



0 2 . 7

What happens to the air surrounding the aeroplane as the height of the aeroplane above the ground increases?

[1 mark]

Tick (✓) **one** box.

The average density of the air above the aeroplane decreases.

The mass of air above the aeroplane increases.

The temperature of the air increases.

The volume of air below the aeroplane decreases.

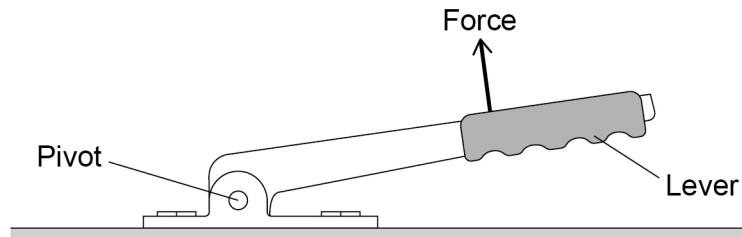
10

0 3

Some cars have a lever that is used to apply the handbrake.

Figure 8 shows the handbrake lever in a car.

Figure 8



0 3 . 1

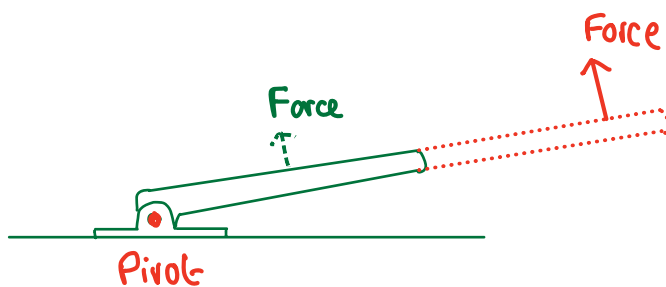
The driver applies the force shown in **Figure 8**. The force produces a moment about the pivot.

How could the driver **increase the moment about the pivot without increasing the size of the force?**

[1 mark]

Apply the force further away from the pivot.

Question 3 continues on the next page



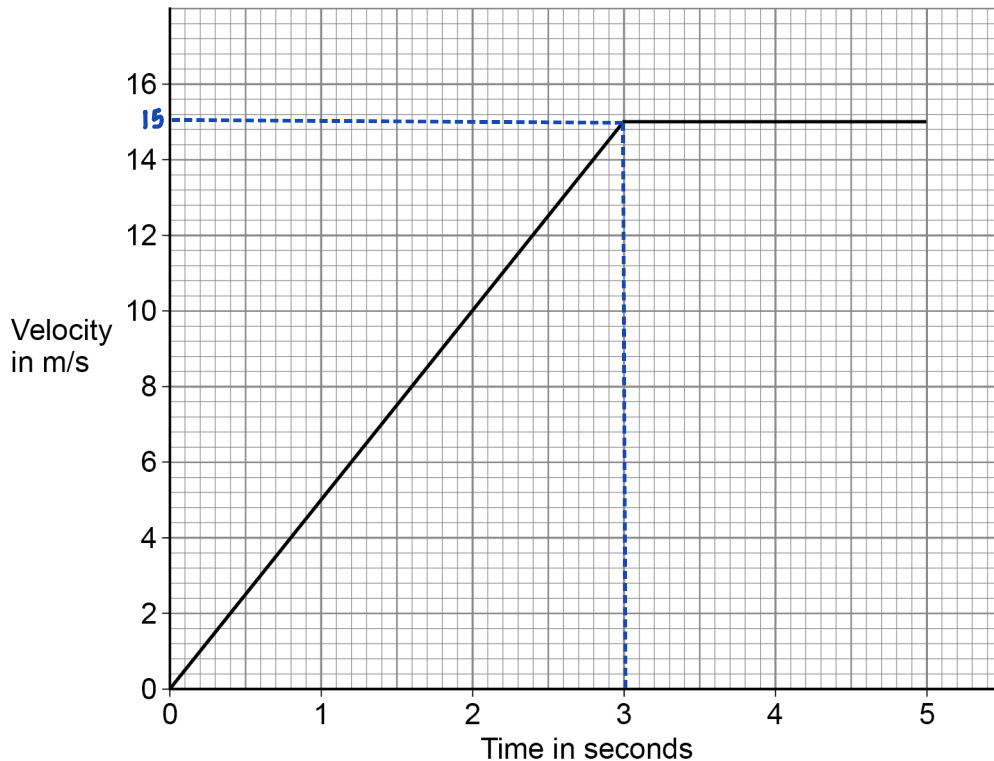
Turn over ►



The driver releases the handbrake.

Figure 9 shows how the velocity of the car changes during the first 5 seconds of a journey.

Figure 9



Get v
from graph

$$\text{Momentum} = \text{Mass} \times \text{Velocity}$$

0 3 . 2 After 3 seconds, the momentum of the car is 24 000 kg m/s.

Calculate the mass of the car.

Use the Physics Equations Sheet.

$$\text{momentum} = \text{mass} \times \text{velocity}$$

$$p = m v \quad [4 \text{ marks}]$$

$$\text{At Time} = 3\text{s}, \text{ velocity} = 15 \text{ m/s} \quad p = m v$$

$$p = 24\,000 \text{ kg m/s}$$

$$m v = p$$

$$m = ?$$

$$m = \frac{p}{v}$$

$$v = 15 \text{ m/s}$$

$$m = \frac{24\,000}{15} = 1600 \text{ kg}$$

$$\text{Mass} = \underline{1600} \text{ kg}$$



0 3 . 3

Determine the distance travelled by the car during the first 5 seconds of the journey.

Use Figure 9.

[3 marks]

$$\begin{aligned} \text{Distance travelled} &= \text{Area under curve} \\ &= \text{Triangle (0-3)} + \text{Rectangle (3-5)} \\ \text{Triangle} &= \frac{1}{2}bh = \frac{1}{2} \times 1.5 \times 15 = 22.5 \text{ m} \\ \text{Rectangle} &= (5-3) \times 15 = 30.0 \text{ m} \\ \text{Total} &= 22.5 + 30 = 52.5 \text{ m} \end{aligned}$$

Distance travelled by the car = 52.5 m

Question 3 continues on the next page



0 3 . 4

In an emergency the driver needs to apply the brakes suddenly to stop the car quickly.

The driver of the car is distracted.

Explain why the distraction will increase the stopping distance.

[3 marks]

Stopping distance includes thinking distance

Driver distracted, so there is additional time before the driver applies the brakes, so thinking distance will increase, and thus overall stopping distance

0 3 . 5

Explain why the temperature of the brakes increases as they are used.

[2 marks]

Work is done due to friction in the brakes

Causing an increase in the internal/thermal energy of the brakes.



Turn over for the next question

*Do not write
outside the
box*

**DO NOT WRITE ON THIS PAGE
ANSWER IN THE SPACES PROVIDED**

Turn over ►

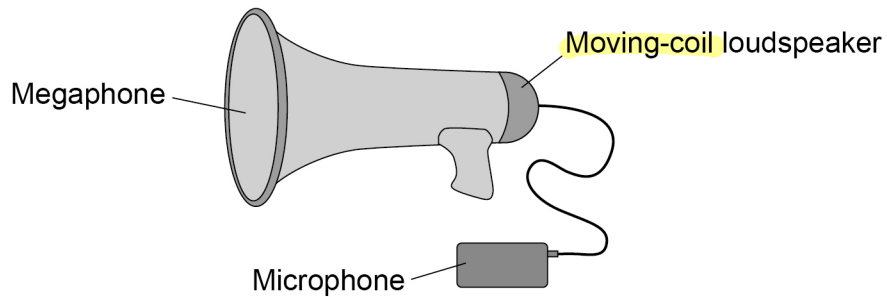


0 4

A megaphone uses a loudspeaker to amplify sounds that are detected by a microphone.

Figure 10 shows a megaphone and microphone.

Figure 10



0 4 . 1

Complete the sentence.

[1 mark]

The microphone is used to convert the pressure variations in sound waves into variations in current
or potential difference.



0 4 . 2

The loudspeaker contains a permanent magnet.

Which diagram in **Figure 11** shows the **direction** of the **magnetic field** between the **north pole** and the **south pole** of the magnet?

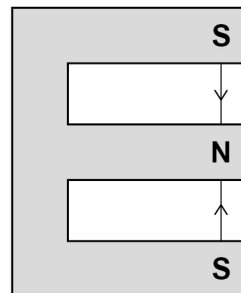
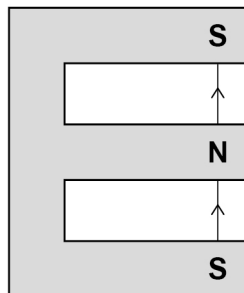
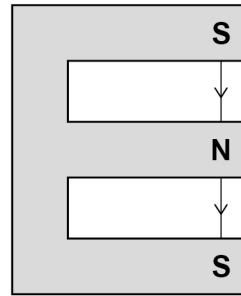
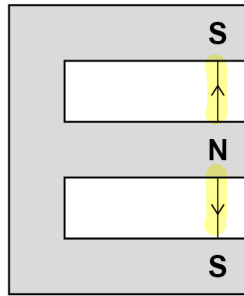
The magnets are shown in cross-section.



[1 mark]

Tick (✓) **one** box.

Figure 11



0 4 . 3

Some magnets are **permanent** magnets and some are **induced** magnets.

What is an **induced magnet**?

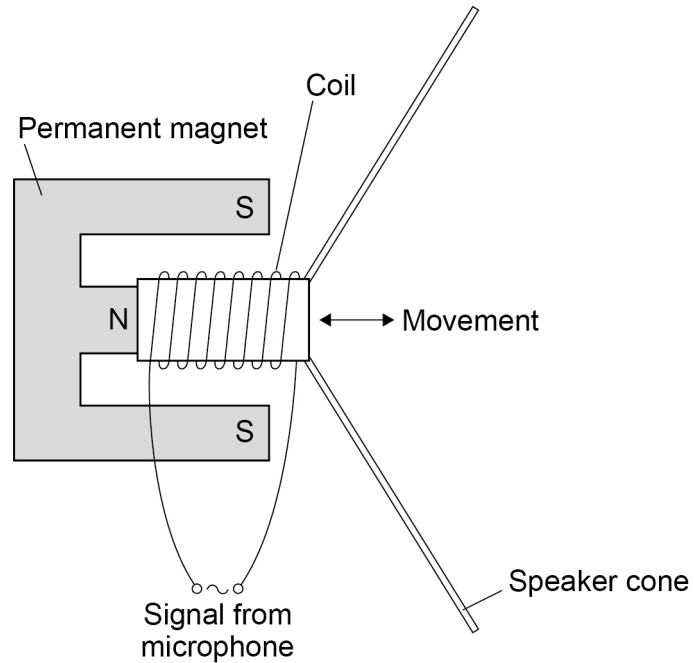
[1 mark]

An induced magnet is a material that becomes a magnet when it is placed in a magnetic field



Figure 12 shows the parts of the loudspeaker in the megaphone.

Figure 12



A current in the coil of the loudspeaker causes the coil to move.

0 4 . 4

What is the name of the effect that causes the coil to move?

[1 mark]

Tick (✓) **one** box.

Electromagnet effect

Induction effect

Motor effect

Speaker effect



0 4 . 5

When the current in the coil is 16 mA, the force on the coil is 0.013 N.

The length of the wire that makes up the coil is 6.5 m.

Calculate the magnetic flux density around the coil in the electromagnet.

Use the Physics Equations Sheet.

force on a conductor (at right angles to a magnetic field) carrying a current =
magnetic flux density \times current \times length

$$F = BIL$$

[4 marks]

$$F = BIL$$

$$F = 0.013 \text{ N}$$

$$BIL = F$$

$$B = ?$$

$$B = \frac{F}{IL}$$

$$I = 16 \text{ mA} = 16 \times 10^{-3} \text{ A}$$

$$IL$$

$$L = 6.5 \text{ m}$$

$$B = \frac{0.013}{16 \times 10^{-3} \times 6.5} = 0.125$$

$$16 \times 10^{-3} \times 6.5$$

Magnetic flux density = 0.125 T

Question 4 continues on the next page

Do not write
outside the
box

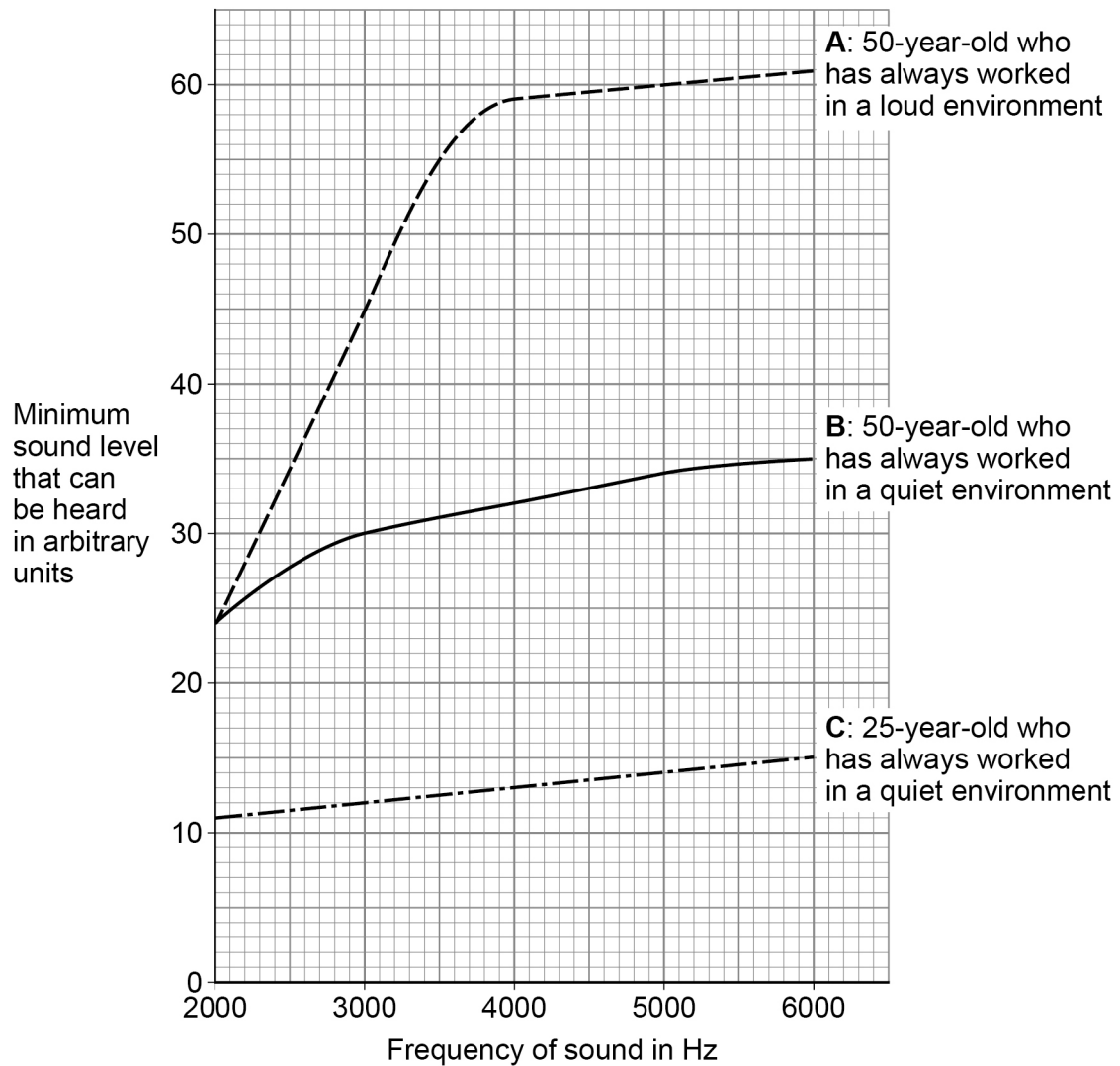


0 4 . 6 Megaphones can produce very loud sounds.

A person's hearing can be affected by age and by working in a loud environment.

Figure 13 shows how frequency affects the minimum sound level that can be heard by three different people, **A**, **B** and **C**.

Figure 13



Compare how different factors affect the minimum sound level that these people can hear.

[4 marks]

For all three people, the minimum sound level that can be heard increases as frequency increases.

Age:

- The minimum sound level that can be heard increases with age.
- Between 2000 and 3000 Hz the minimum sound level that can be heard increases more in B than in C
- C has little variation in the minimum sound level that can be heard at all frequencies.

Working in a loud environment:

Turn over for the next question

- Increases the minimum sound level that can be heard at all frequencies above 2000 Hz compared to working in a quiet environment.
- The minimum sound level that can be heard increases more as frequency increases from 2000 to 4000 Hz compared to working in a quiet environment.
- doesn't affect the minimum sound level that can be heard at 2000 Hz

12



0 5

Figure 14 shows some bumper cars.

Bumper cars are designed to withstand collisions at low speeds.

Figure 14



0 5 . 1

During a collision between a bumper car and the barrier, the bumper car and barrier act as a closed system.

What is meant by a 'closed system'?

[1 mark]

The total amount of energy of the bumper car and barrier remains constant.



0 5 . 2

How does **Newton's Third Law of motion** apply to the collision between the bumper car and the barrier?

[1 mark]

The force of the car on the barrier is equal to the force of the barrier on the car and in the opposite direction

0 5 . 3

During the collision, the change in momentum of the bumper car is 700 kg m/s .

The time taken for the collision is 0.28 s .

Calculate the force on the bumper car during the collision.

Use the Physics Equations Sheet.

$$\text{force} = \frac{\text{change in momentum}}{\text{time taken}}$$

$$F = \frac{m \Delta v}{\Delta t}$$

[2 marks]

$$F = \frac{m \Delta v}{\Delta t} = \frac{700 \text{ kg m/s}}{0.28 \text{ s}} = 2500 \text{ N}$$

Force = 2500 N

Question 5 continues on the next page

Turn over ►



0 5 . 4

The bumper car has a flexible bumper.

Explain how the flexible bumper reduces the risk of injury to the people in the bumper car during the collision.

[3 marks]

Flexible bumper increases the time taken for the collision to occur.

So the rate of change of momentum decreases

Reducing the force on the people.

0 5 . 5

A bumper car moved with an initial constant velocity u and then accelerated a at 2.0 m/s^2 .

While accelerating, the bumper car travelled a distance of s 1.5 m .

The final velocity of the bumper car was v 2.5 m/s .

Calculate the initial constant velocity u of the bumper car.

Use the Physics Equations Sheet.

(final velocity)² - (initial velocity)² = 2 × acceleration × distance

$v^2 - u^2 = 2as$ [3 marks]

$$v = 2.5 \text{ m/s} \quad v^2 - u^2 = 2as$$

$$u = ? \quad v^2 = 2as + u^2$$

$$a = 2.0 \text{ m/s}^2 \quad v^2 - 2as = u^2$$

$$s = 1.5 \text{ m} \quad u^2 = v^2 - 2as$$

$$u = \sqrt{v^2 - 2as}$$

Initial constant velocity = 0.5 m/s

$$u = \sqrt{2.5^2 - (2 \times 2.0 \times 1.5)}$$

$$u = 0.5$$

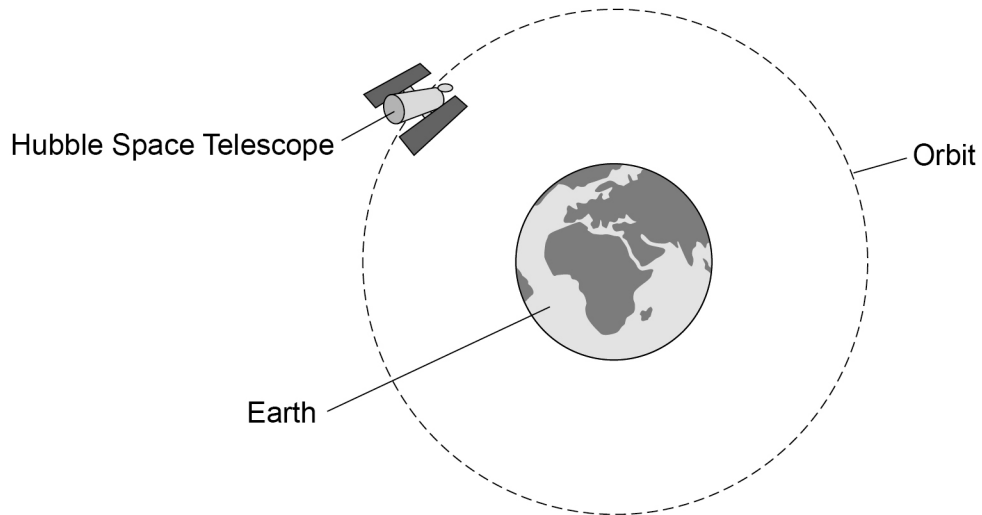
10



0 6

Figure 15 shows the Hubble Space Telescope orbiting the Earth.

Figure 15



0 6

1

What name is given to objects that orbit a planet?

[1 mark]

satellite

Question 6 continues on the next page

Turn over ►



0 6 . 2

A space telescope uses microwaves to communicate with the Earth.

A microwave has a wavelength of 12.5 cm. λ m!

The speed of microwaves through space is 3.0×10^8 m/s. v

Calculate the frequency of the microwave. f

Use the Physics Equations Sheet.

Give your answer in standard form.

wave speed = frequency \times wavelength

$$v = f \lambda$$

[5 marks]

$$v = 3.0 \times 10^8 \text{ m/s}$$

$$v = f \lambda$$

$$f = ?$$

$$f \lambda = v$$

$$\lambda = 12.5 \text{ cm}$$

$$f = \frac{v}{\lambda}$$

$$= \frac{12.5}{100} \text{ m}$$

$$\lambda$$

$$= 0.125 \text{ m}$$

$$f = \frac{3.0 \times 10^8 \text{ m/s}}{0.125 \text{ m}}$$

$$0.125 \text{ m}$$

$$f = 2.4 \times 10^9 \text{ Hz}$$

Frequency (in standard form) = 2.4×10^9 Hz

0 6 . 3

Explain the effect of the Earth's gravitational force on the motion of the Hubble Space Telescope.

[3 marks]

Gravitational force causes the Hubble Space Telescope to accelerate towards the Earth.

This changes the direction of motion, but not the speed, so changes the velocity of the Hubble Space Telescope

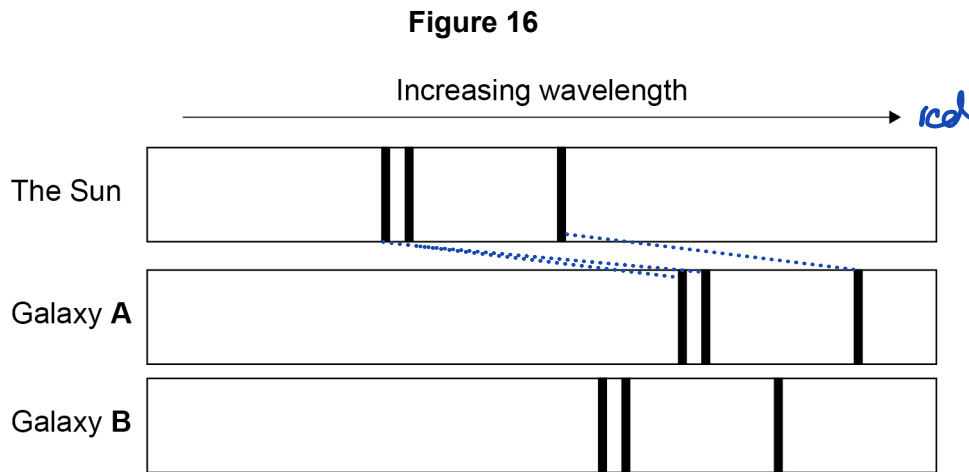


0 6 . 4

The Hubble Space Telescope can detect visible light from distant galaxies.

The visible light spectra from stars and galaxies include dark lines at specific wavelengths.

Figure 16 shows the visible light spectra from the Sun and two galaxies.



Explain what conclusions can be made about galaxies **A** and **B**.

[3 marks]

Galaxy A has the greater red-shift.

so A is travelling away from us faster than B

Because A is further away from us than B.

12

Turn over for the next question

Turn over ►



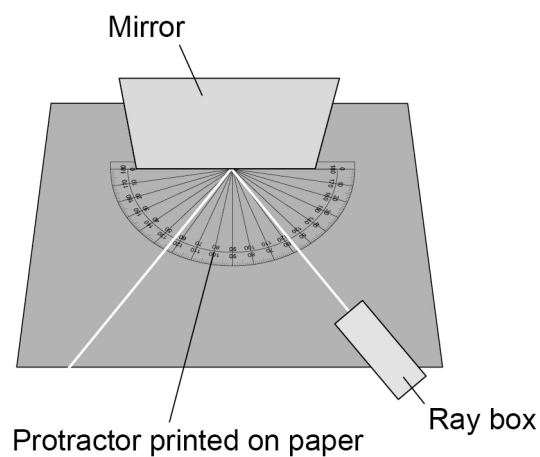
0 7

A student investigated the behaviour of light.

The student used a mirror with a smooth surface to investigate reflection.

Figure 17 shows the equipment used.

Figure 17



0 7 . 1

What name is given to reflection from a smooth surface?

[1 mark]

Specular reflection



The student measured the angle of reflection for different angles of incidence.

Table 2 shows the results.

Table 2

Angle of incidence in degrees	Angle of reflection in degrees			
	Test 1	Test 2	Test 3	Mean
10	8	10	11	10
20	20	21	20	20
30	28	29	32	30
40	39	41	41	40
50	49	50	52	50

0 7 . 2 What conclusion can be made from the results in **Table 2**?

[1 mark]

The angle of incidence = the mean angle of reflection

0 7 . 3 What type of error caused the variation in the results for the angle of reflection?

Suggest **one** cause of this error.

[2 marks]

Type of error Random

Cause of error The centre of the ray may not have been marked correctly

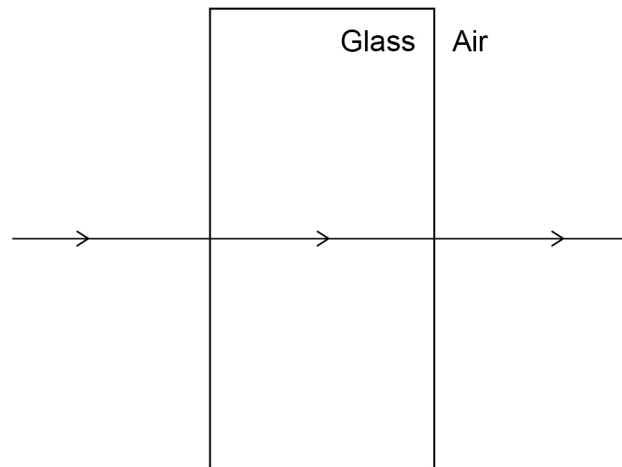
Turn over ►



The student also investigated the refraction of light.

0 7 . 4 **Figure 18** shows the path of a ray of light through a glass block.

Figure 18



Why has refraction **not** occurred?

[1 mark]

Because all points on the wavefront enter the glass at the same time.

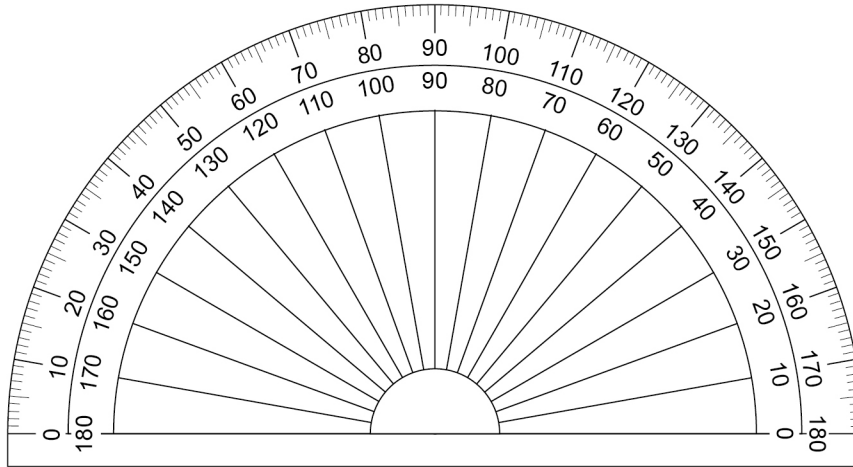


07.5

The student measured the angle of refraction for different angles of incidence.

Figure 19 shows the protractor used.

Figure 19



Resolution
← = 1°

When the angle of incidence was 10° the student measured the angle of refraction four times.

The student recorded the measurements as:

6.0°

6.3°

6.4°

5.8°

↙ 1 d.p.

Explain why the student should **not** have recorded these results when using the protractor in Figure 19 to make the measurements.

[2 marks]

The resolution of the protractor is 1°,
so it could not have been used to measure
the difference between the results.

Question 7 continues on the next page

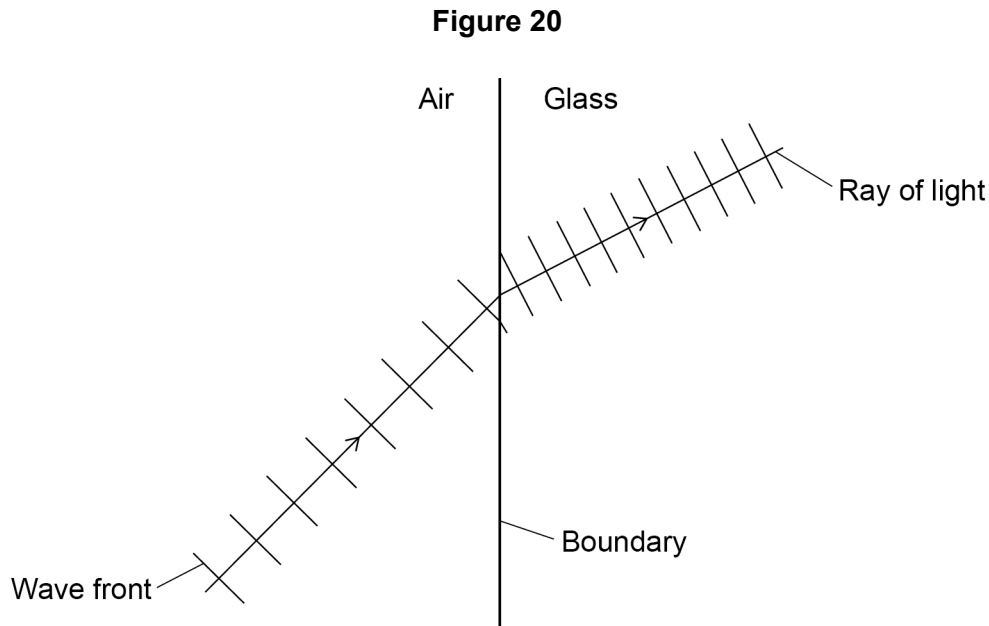
Turn over ►



0 7 . 6

Figure 20 shows what happens to wave fronts as they pass across the boundary between air and glass.

Do not write
outside the
box



Explain in terms of the wave fronts, why refraction happens at the boundary between air and glass.

[3 marks]

Different parts of the wavefront enter the glass at different times.

The velocity of light is slower in glass

So one part of the wavefront changes speed before other parts.

10



Turn over for the next question

*Do not write
outside the
box*

**DO NOT WRITE ON THIS PAGE
ANSWER IN THE SPACES PROVIDED**

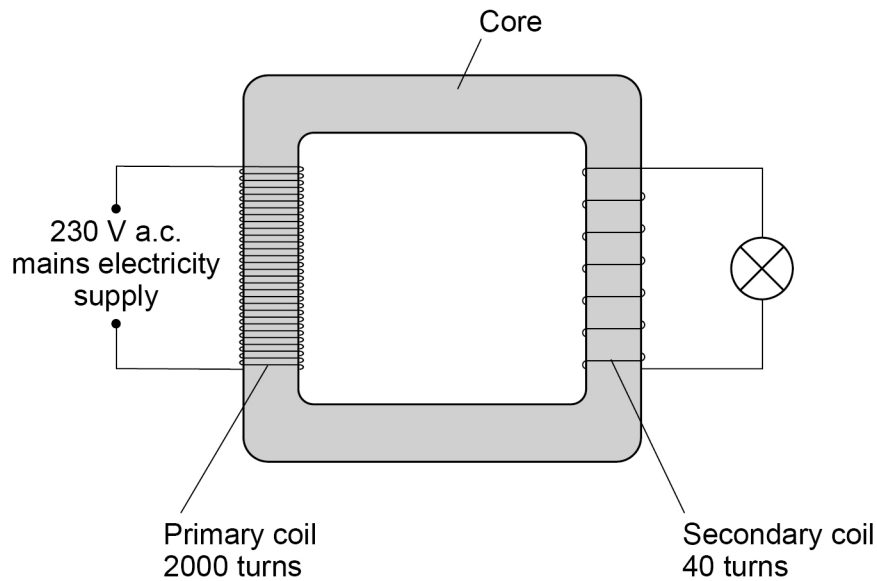
Turn over ►



0 8

Figure 21 shows a transformer used to power a lamp using the mains electricity supply.

Figure 21



0 8 . 1

What material is used to make the core of the transformer?

Give the reason for using this material.

[2 marks]

Material Iron

Reason It is easily magnetised and de-magnetised



0 8 . 2

Determine the current in the secondary coil when the power output of the transformer is 6.9 W.

The transformer is 100% efficient.

Use the Physics Equations Sheet.

$$\frac{\text{potential difference across primary coil}}{\text{potential difference across secondary coil}} = \frac{\text{number of turns in primary coil}}{\text{number of turns in secondary coil}} \quad \left| \quad \frac{V_p}{V_s} = \frac{n_p}{n_s} \right. \quad \text{[5 marks]}$$

$$V_p = 230 \text{ V}$$

$$\frac{V_p}{V_s} = \frac{n_p}{n_s}$$

$$V_s = ?$$

$$V_s \quad n_s$$

$$n_p = 2000$$

$$n_s V_p = n_p V_s$$

$$n_s = 40$$

$$\frac{n_s V_p}{n_p} = V_s$$

$$n_p$$

$$V_s = \frac{40 \times 230}{2000}$$

$$V = 4.6 \text{ V}$$

Current in the secondary coil = 1.5 A

power = potential difference \times current

$$P = VI$$

Turn over for the next question

$$P = 6.9 \text{ W}$$

$$V = 4.6 \text{ V}$$

$$I = ?$$

$$P = VI$$

$$VI = P$$

$$I = \frac{P}{V}$$

$$I = \frac{6.9}{4.6}$$

$$I = 1.5 \text{ A}$$

7



0 9

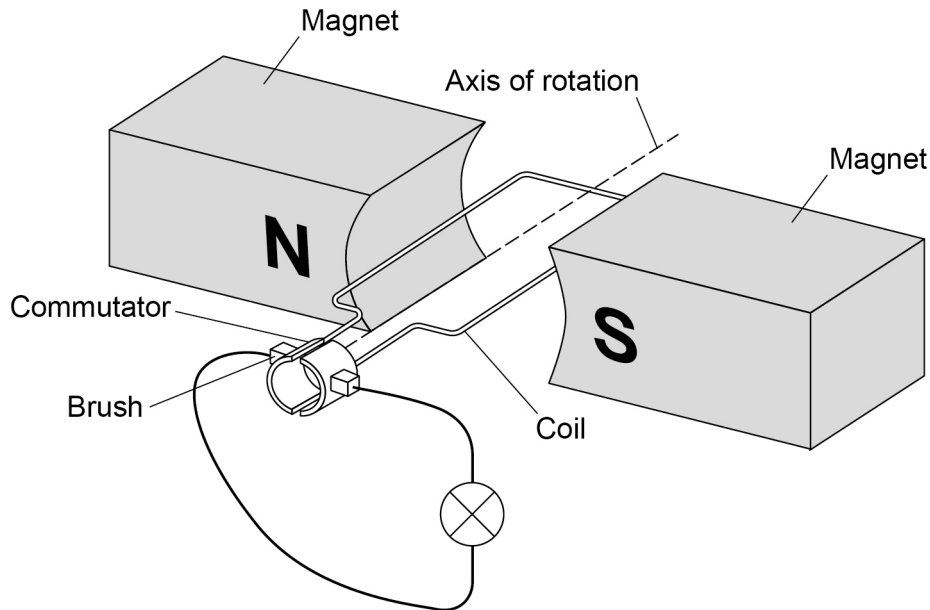
A **dynamo** is used to generate an electric current.

Dynamo = DC
Alternator = AC

Do not write
outside the
box

Figure 22 shows the inside parts of the dynamo connected to a lamp.

Figure 22



0 9 . 1

The coil is rotated.

Explain why a **direct current** is induced in the coil.

[5 marks]

The coil moves and cuts magnetic field lines

A potential difference is induced across the coil

There is a complete circuit, so a current is induced in the coil,

Because each half revolution, the two ends of the coil swap from one brush to the other, the direction of the induced current does not reverse every half rotation.

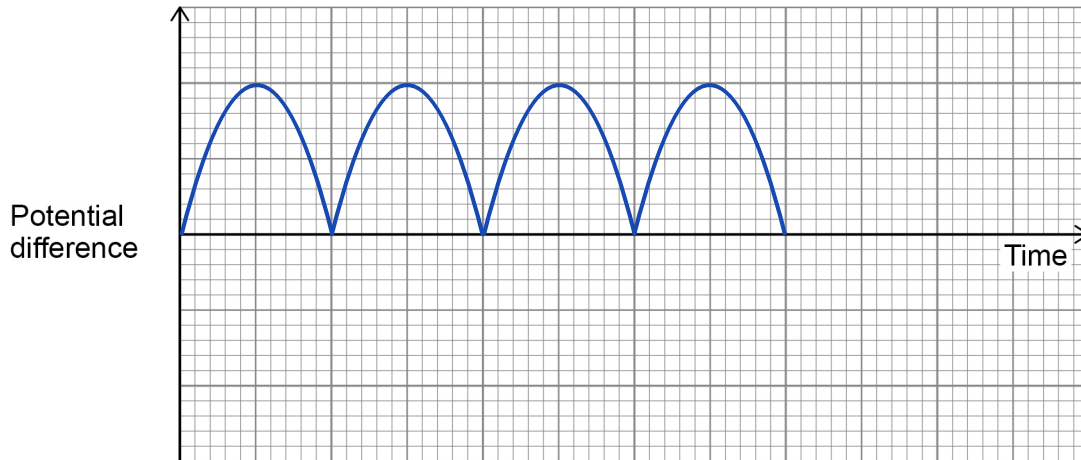


0 9 . 2

Sketch a graph on **Figure 23** to show how the potential difference generated across the lamp varies for **two** complete revolutions of the dynamo coil.

[1 mark]

Figure 23



0 9 . 3

The lamp is **disconnected** from the dynamo.

Explain **why** the dynamo becomes **much easier to turn**.

[3 marks]

After disconnection there is no induced current

So no magnetic field produced by the coil

to oppose the movement of the coil

9

END OF QUESTIONS



There are no questions printed on this page

*Do not write
outside the
box*

**DO NOT WRITE ON THIS PAGE
ANSWER IN THE SPACES PROVIDED**



There are no questions printed on this page

*Do not write
outside the
box*

**DO NOT WRITE ON THIS PAGE
ANSWER IN THE SPACES PROVIDED**

Copyright information

For confidentiality purposes, all acknowledgements of third-party copyright material are published in a separate booklet. This booklet is published after each live examination series and is available for free download from www.aqa.org.uk.

Permission to reproduce all copyright material has been applied for. In some cases, efforts to contact copyright-holders may have been unsuccessful and AQA will be happy to rectify any omissions of acknowledgements. If you have any queries please contact the Copyright Team.

Copyright © 2023 AQA and its licensors. All rights reserved.

